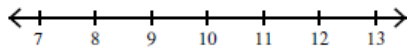


Solving One-Step Inequalities by Adding/Subtracting

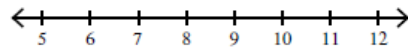
Date _____ Period ____

Solve each inequality and graph its solution.

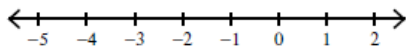
1) $x + 8 \geq 18$



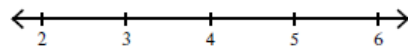
2) $x - 1 > 6$



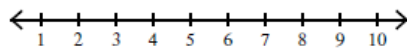
3) $-7 + x \geq -8$



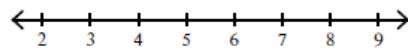
4) $x - 1 \leq 3$



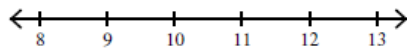
5) $n - 2 \leq 4$



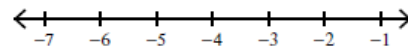
6) $v - 1 < 3$



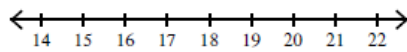
7) $-18 + n < -7$



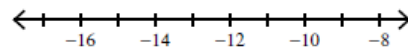
8) $r + 13 < 9$



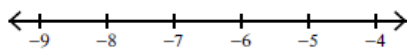
9) $n - 4 \geq 13$



10) $p + 8 > -4$



11) $17 + k \leq 10$



12) $-2 + x \leq -16$

