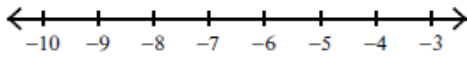


Name: _____

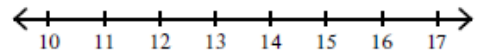
Date: _____

Solve each inequality and graph its solution.

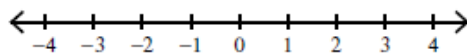
1) $-5x \geq 25$



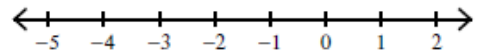
2) $\frac{n}{4} \leq 3$



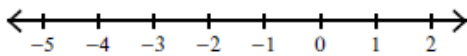
3) $2n > 2$



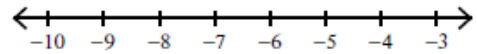
4) $\frac{n}{4} \leq -\frac{1}{4}$



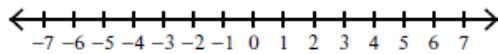
5) $-3x > 0$



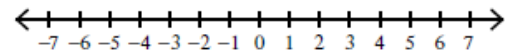
6) $\frac{m}{4} \leq -2$



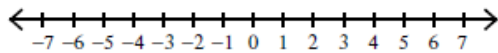
7) $x \geq -2$



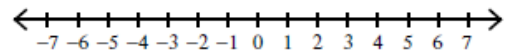
8) $0 \geq p$



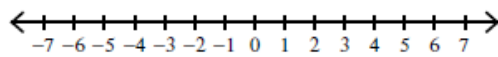
9) $-4 > -x$



10) $x \geq 0$



11) $-m \geq 5$



12) $n \geq 3$

